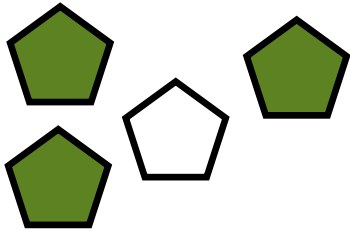


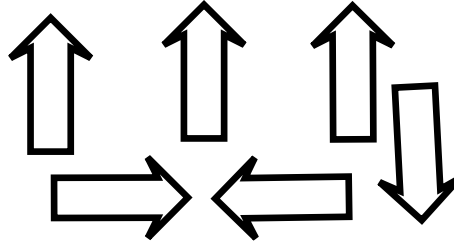
# Fractions of a group or set

## Grade 1 Fractions Worksheet


What fraction of the pentagons are green?


$$\frac{\square}{\square}$$

What fraction of the arrows point up?


$$\frac{\square}{\square}$$

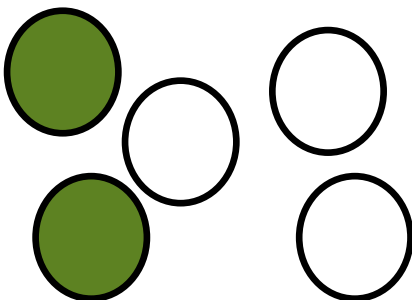
What fraction of the triangles are green?


$$\frac{\square}{\square}$$

What fraction of the stars are white?


$$\frac{\square}{\square}$$

What fraction of the circles are green?


$$\frac{\square}{\square}$$

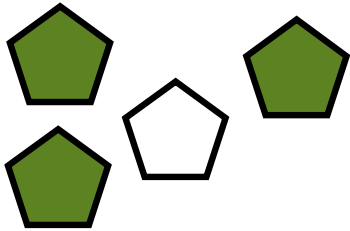
What fraction of the squares are green?


$$\frac{\square}{\square}$$

# Fractions of a group or set

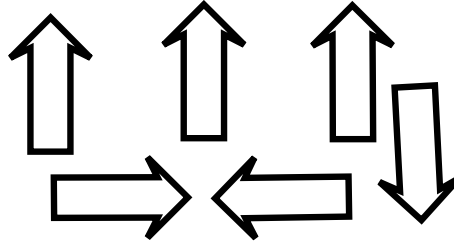
## Grade 1 Fractions Worksheet

What fraction of the pentagons are green?




$$\frac{3}{4}$$

What fraction of the arrows point up?



$$\frac{3}{6}$$

What fraction of the triangles are green?



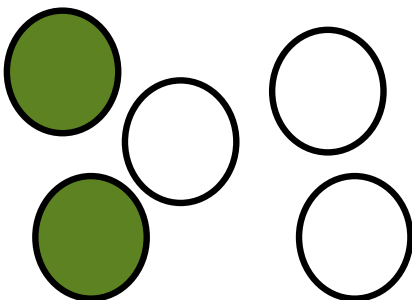
$$\frac{4}{8}$$

What fraction of the stars are white?



$$\frac{1}{5}$$

What fraction of the circles are green?



$$\frac{2}{5}$$

What fraction of the squares are green?



$$\frac{4}{5}$$